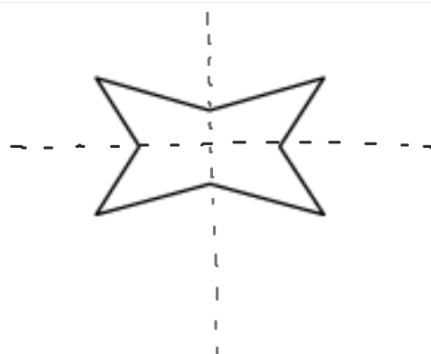
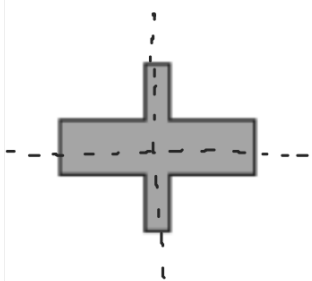


What transformations can be used to map the figure onto itself? Why can some figures be mapped onto themselves?



SOLUTION

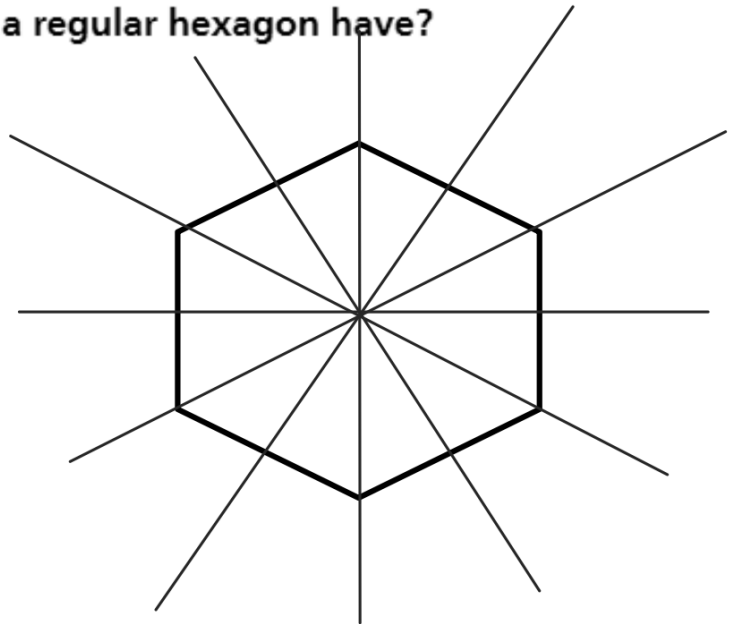
1. a. What transformations map the figure onto itself?



1. b. What transformations map the figure onto itself?



How many lines of symmetry does a regular hexagon have?



2.a. How many lines of symmetry does the figure have? How do you know whether you have found them all?



2.b. How many lines of symmetry does the figure have? How do you know whether you have found them all?



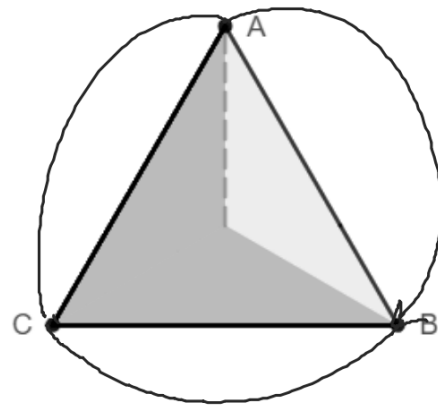
For what angles of rotation does the figure map onto itself?

A. an equilateral triangle

Rotate the figure in the tool to the right by dragging the slider.

SOLUTION

120°
 240°

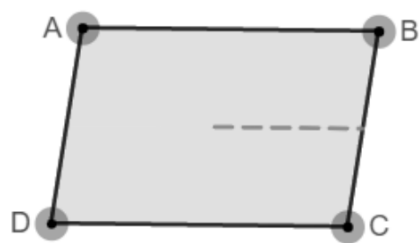


For what angles of rotation does the figure map onto itself?

B. a parallelogram

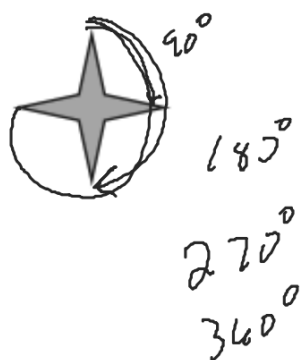
Rotate the figure in the tool to the right by dragging the slider.

SOLUTION



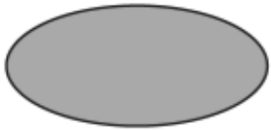
Try It!

3. a. What are the rotational symmetries for the figure? Does the figure have point symmetry?



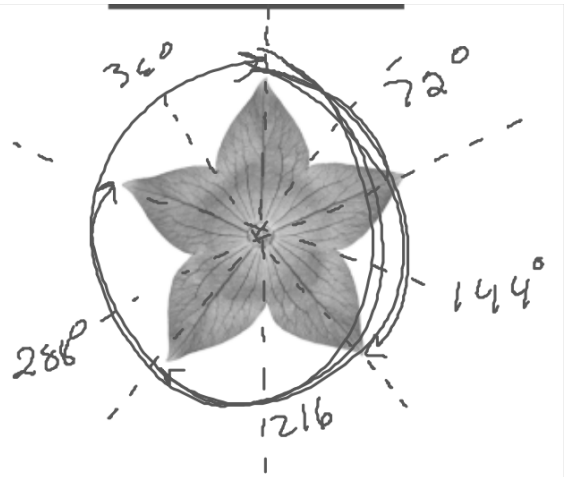
Try It!

3. b. What are the rotational symmetries for the figure? Does the figure have point symmetry?



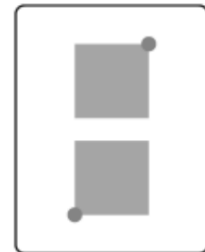
What type(s) of symmetry does the figure have?

SOLUTION




What type(s) of symmetry does the figure have?

SOLUTION



4. What symmetries does a square have?



Symmetry

Reflectional Symmetry

WORDS

- A figure that maps onto itself when it is reflected over a line has reflectional symmetry.
- A line of symmetry is a line of reflection when a figure is reflected onto itself.

DIAGRAM



Rotational Symmetry

- A figure that maps onto itself when it is rotated about its center by an angle measuring less than 360° has **rotational symmetry**.
- A figure with 180° rotational symmetry has **point symmetry**.

